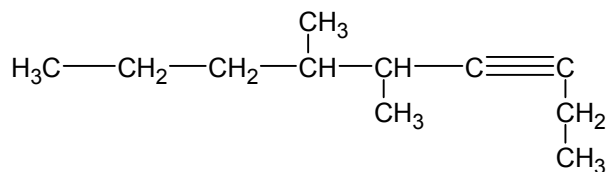
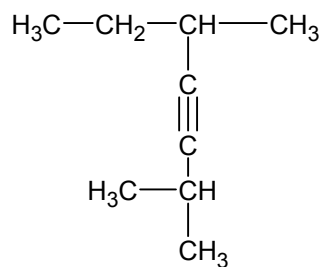
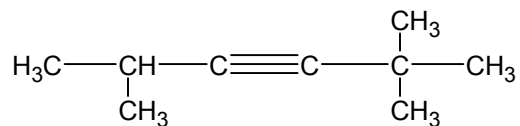
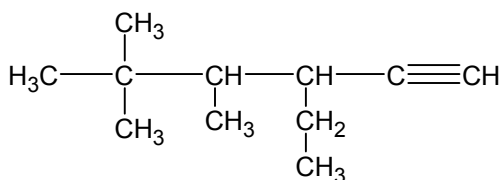
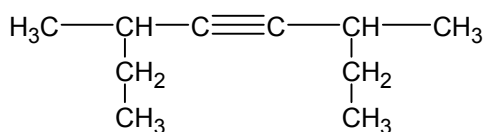
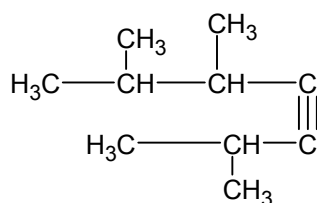
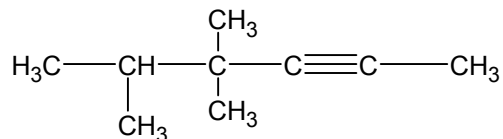
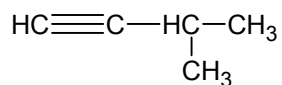


Naming Alkynes Worksheet #1



Naming Alkynes Worksheet #2

Draw the structural formula for each of the following:

3-ethyl-1-pentyne

3,3-dimethyl-1-butyne

4,4,5 – trimethyl-2-hexyne

4-ethyl-4-methyl-2-pentyne